

# RAHUL MODEL SR. SEC. PUBLIC SCHOOL

Recognised Senior Secondary & Affiliated to CBSE

Railway Road, Sadh Nagar-II, Palam Colony, New Delhi

ASSIGNMENT

SUBJECT – ENGLISH

CLASS- IV

NAME- \_\_\_\_\_

ROLL NO- \_\_\_\_\_

M.M. 30

- Q 1. Think and answer the following questions- (3x2=6)
- (a) If you were the emperor of China, what three qualities would you like your successor to have in addition to honesty?
  - (b) Why do you think people lie? Would you like to make friends with someone who lies all the time?
  - (c) A pistol shrimp lives in a burrow which it shares with a Goby fish. Each one helps the other. How do they help each other?

- Q 2. Answer the following questions- (3x1=3)
- (a) How pistol shrimps hunt the fishes?
  - (b) What is the full name of APJ Abdul Kalam?
  - (c) Write the names of two-two things which are discovered and invented?

- Q 3. Rearrange these groups of words to form meaningful sentences- (2x1=2)
- (a) Cat / chase / dog / did / the / the /?
  - (b) Sleepy / a baby / take / nap / the /:/:

- Q 4. Look around your classroom. Write two sentences about it using these words- (2x1=2)
- (a) Some
  - (b) Any

- Q 5. Write down the three adjectives of this picture and write its order also- (2)



- Q 6. Complete the sentences with the finite form of the verb in the brackets- (6x ½ =2)
- (a) This apple \_\_\_\_\_ sour. (taste)
  - (b) The grapes \_\_\_\_\_ sweet. (taste)
  - (c) I have not \_\_\_\_\_ the orange yet. (taste)
  - (d) Mr.Lim \_\_\_\_\_ in the house next door. (live)
  - (e) His brother \_\_\_\_\_ with him. (live)
  - (f) Their cousins \_\_\_\_\_ with them. (live)


- Q 7. Match the animals names with their meanings when used as verbs- (6x ½ =3)
- | Animals name   | Meaning              |
|----------------|----------------------|
| To snail       | to ask repeatedly    |
| To badger      | to be scared         |
| To dog         | to move slowly       |
| To crane       | to follow            |
| To crow        | to stretch ones neck |
| To chicken out | to boast             |

- Q 8. Use appropriate conjunctions to fill in the blanks - (4x ½ =2)
- (a) Do write back \_\_\_\_\_ keep in touch.
  - (b) They lost the way \_\_\_\_\_ it was dark.
  - (c) He started studying \_\_\_\_\_ his parents went out.
  - (d) She never studied \_\_\_\_\_ still passed the exams.

- Q 9. Who said this to whom? (2x1=2)
- (a) "I suspect this goldsmith."
  - (b) "Eureka! Eureka!"

- Q 10. Do as directed - (2x1=2)
- (a) This pens costs twenty rupees. (interrogative sentence)
  - (b) What do you like to eat? (Imperative sentence)

- Q 11. Spell the words that name these pictures correctly- (3x1=3)



OR

Write a biography of APJ Abdul Kalam.

# RAHUL MODEL SR. SEC. PUBLIC SCHOOL

Recognised Senior Secondary & Affiliated to CBSE

Railway Road, Sadh Nagar-II, Palam Colony, New Delhi

ASSIGNMENT

SUBJECT – MATHS

CLASS- IV

NAME- \_\_\_\_\_

ROLL NO- \_\_\_\_\_

M.M. 30

Q 1. Tick the correct option- (1x5=5)

(1) \_\_\_\_\_ x 100 = 8200

(a) 100 (b) 82 (c) 820 (d) 8200

(2)  $0 \div 7$  is equal to \_\_\_\_\_

(a) 7 (b) 14 (c) 0 (d) 1

(3) One-fifth of 10 sweets is \_\_\_\_\_

(a) 2 sweets (b) 5 sweets (c) 1 sweet (d) 10 sweets

(4) Match the following-

(A) 77 is a factor of (i) 9  
(B) 18 is greatest factor of (ii) 21  
(C) 7 & 3 are factor of (iii) 18  
(D) 45 is a multiple of (iv) 11

(a) A-iv, B-iii, C-ii, D-i  
(b) A-iii, B-ii, C-i, D-iv  
(c) A-iii, B-iv, C-ii, D-i  
(d) A-ii, B-iii, C-i, D-iv

(5) When Numerator is greater than denominator, the fraction is called a/an

(a) Proper fraction (b) Unit function (c) improper fraction (d) mixed fraction

Q 2. Arrange the following fractions- (1x2=2)

(a)  $\frac{4}{6}, \frac{2}{6}, \frac{1}{6}, \frac{5}{6}$  into Ascending order

(b)  $\frac{7}{13}, \frac{12}{13}, \frac{5}{13}, \frac{9}{13}$  into Decending order

Q 3. Solve : (2x2=4)

(a)  $2\frac{5}{8} + 1\frac{1}{8} + \frac{2}{8}$

(b)  $8005 \times 49$

Q 4. Do as directed :-

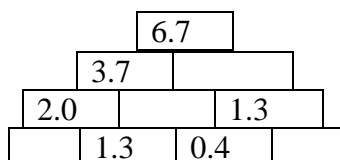
(a) Reduce  $\frac{54}{72}$  to its simplest form (2)

(b) Write  $2\frac{3}{7}$  as improper fraction (1)

(c) Find  $\frac{3}{5}$  of 40 (2)

Q 5. Prime factorize 84 by tree method- (3)

Q 6. Complete the addition pyramid- (0.5x4=2)



- Q 7. Story sums- (3x2=6)
- (a) 25 pizzas are sold in a day. In how many days will 2050 pizzas be sold?
- (b) A laptop costs Rs7,540 less than a T.V. if the T.V. costs Rs 69,450 then find the
- (i) Cost of laptop
  - (ii) Total cost of laptop and T.V.

- Q 8. Source based - (1x3=3)
- Sid has a chocolate bar divided into 10 equal pieces. He ate 2 pieces, gave 4 pieces to viraj and 3 pieces to Kavya.
- (a) What fraction of whole chocolate bar did Sid eat?
  - (b) What fraction of the whole bar did Sid give to Viraj and Kavya altogether?
  - (c) What fraction of the chocolate bar is left with Sid?

# RAHUL MODEL SR. SEC. PUBLIC SCHOOL

Recognised Senior Secondary & Affiliated to CBSE

Railway Road, Sadh Nagar-II, Palam Colony, New Delhi

ASSIGNMENT

SUBJECT – SOCIAL STUDIES

CLASS- IV

NAME- \_\_\_\_\_

ROLL NO- \_\_\_\_\_

M.M. 30

Q 1. Multiple choice questions- (1x5=5)

(1) The largest tidal forest in the world-

(a) Sunderban (b) Mangrove (c) Scrub (d) Thorn

(2) Hirakund Dam built on which

(a) Mahanadi (b) Satluj (c) Krishna (d) Narmada

(3) Tick the correct option-

1- Bay of Bengal (a) West of India

2- Arabian sea (b) East of India

3- Indian ocean (c) North of India

4- The Great Himalayan Range (d) South of India

(a) 1-d,2-c,3-a,4-b (b) 1-b,2-a,3-d,4-c (c) 1-a,2-c,3-d,4-b (d) 1-b,2-d,3-c,4-a

(4) During this season nights are longer than the days

(a) Summer (b) autumn (c) winter (d) spring

(5) The capital of Chhattisgarh is

(a) Bhopal (b) Mumbai (c) Chennai (d) Raipur

Q 2. Source based question - (3x1=3)



(a) What does the picture depict?

(b) Where and when it is held?

(c) What is the commonly language spoken in Kerala?

Q 3. Case study questions- (3x1=3)

In India, the rainy season or monsoon starts in mid- June and continues up to mid-October. During this season the moisture laden winds called monsoon winds blow from the Arabian sea and the Bay of Bengal towards the Indian mainland. These winds bring heavy rainfall first to the Malabar coast in June. Slowly, the monsoon winds spread to all other parts of the country by mid- July. They bring most of the rainfall to the country receive different amounts of rainfall. The north – eastern states, particularly Meghalaya, receive very rainfall. While parts of Rajasthan receive scanty rainfall. The monsoon winds cause rainfall in most parts of the country except the Tamil Nadu coast, which gets rainfall from November to January.

Rains bring much relief from the summer heat and are important for farming. People use umbrellas, raincoats and gumboots to protect themselves from rain. They enjoy the rainy season by eating bhuttas and pakoras.

1- When this season starts and end?

2- Which food people like to it?

3- Write down the name of the state where heavy rainfall.

- Q 4. Tick the correct statement and tell the reason why it is correct - (2x2=4)
- 1- Punjab is regarded as a land of agriculture.
  - 2- Jharkhand was formed out of Bihar on 14<sup>th</sup> November 1999.
  - 3- Madhya Pradesh is known as 'Heart of India'
  - 4- Malwa plateau is the largest plateau of all the southern plateaus.
- Q 5. Define the following terms – (do any 2) (2x1=2)
- 1- Sanddunes
  - 2- Tableland
  - 3- Climate
- Q 6. Give reason - (2x2=4)
- 1- Tidal forests are known as Mangrove forest. Why?
  - 2- Delhi is called 'Mini India'. Why?
- Q 7. Answer the following questions- (3x2=6)
- 1- Write short note on Chipko movement.
  - 2- Camel is the major mode of transport in desert. Explain it.
  - 3- What are the grown crops in southern plateau region?
- Q 8. Locate the following state in Indian political map.
- 1- Uttar Pradesh
  - 2- Kerala
  - 3- Gujarat

# RAHUL MODEL SR. SEC. PUBLIC SCHOOL

Recognised Senior Secondary & Affiliated to CBSE

Railway Road, Sadh Nagar-II, Palam Colony, New Delhi

ASSIGNMENT

SUBJECT – SCIENCE

CLASS- IV

NAME- \_\_\_\_\_

ROLL NO- \_\_\_\_\_

M.M. 30

Q 1. Multiple choice questions-

(1x5=5)

(1) What is the process called when animals produce babies?

- (a) Respiration      (b) photosynthesis      (c) reproduction      (d) decomposition

(2) What helps deserts camels move on sand?

- (a) Their small feet      (c) their wide , padded feet  
(b) Their sharp clause      (d) their strong teeth

(3) Why should you wear a helmet while riding a bike?

- (a) To look cool      (c) to protect your head from injury  
(b) To carry your school bag      (d) to talk to your friends

(4) Which of the following is a type of winter clothing?

- (a) Shorts      (b) T-shirt      (c) sweater      (d) sandals

(5) Which of the following is not a planet?

- (a) Earth      (b) moon      (c) Sun      (d) mars

Q 2. Source based questions-

(3x1=3)



(a) Which phase comes before the full moon?

(b) What is the name of the phase when the whole moon is illuminated?

(c) On which night the moon is not visible?

Q 3. Case study

(3x1=3)

### Rohan's Wardrobe

Introduction : Rohan is a class IV student who lives in a city with varying weather conditions. He has a mix of summer or winter clothes in his wardrobe.

Problem: Rohan's mother ask him to sort out his clothes for the upcoming season. Rohan is confused about what clothes to wear in summer and winter.

1- What type of clothes should Rohan wear in summer?

2- What type of clothes should Rohan wear in winter?

3- How can Rohan take care of his clothes?

Q 4. Tick the correct statement and tell the reason why it is correct-

(2x2=4)

1- Mammals lay eggs

2- Birds give birth to babies

3- Fish reproduce by laying eggs.

4- All animals give birth to babies.

5- Reptiles reproduce by laying eggs.

Q 5. Define- (3x1=3)  
1- Orbit  
2- Galaxy  
3- Revolution

Q 6. Give reason- (3x2=6)  
1- Why do polar bear have white fur?  
2- Why do we need to wash our clothes?  
3- Why do we see the moon in the night sky?

Q 7. Short answer type questions- (3x2=6)  
1- What is the role of males and females in reproduction?  
2- Why is the moon important to the earth?  
3- Why it is important to wear helmet while cycling?



# RAHUL MODEL SR. SEC. PUBLIC SCHOOL

Recognised Senior Secondary & Affiliated to CBSE

Railway Road, Sadh Nagar-II, Palam Colony, New Delhi

ASSIGNMENT

SUBJECT – HINDI

CLASS- IV

NAME- \_\_\_\_\_

ROLL NO- \_\_\_\_\_

M.M. 30

प्र-1 निम्नलिखित प्रश्नों के उत्तर लिखो—

(3×2=6)

1. वन-विभाग किसे कहते हैं?
2. चिड़ियों जमीन क्यों खोद रही थी?
3. ईश्वर किन लोगों का पथ आलोकित करते हैं?

प्र-2 निम्नलिखित शब्दों से वाक्य बनाए—

(2)

1. पर्यावरण
2. गुरुकुल

प्र-3 रेखांकित शब्दों में कौन सी संज्ञा हैं—

(2)

1. राम एक अच्छा लड़का है।
2. रीना बहुत ईमानदार लड़की है।
3. राही पेड़ की छाँव में आराम कर रहा है।
4. रामायण एक धार्मिक पुस्तक है।

प्र-4 दिए गए चित्रों में विशेषण व विशेष्य लिखिए—

2



विशेषण

विशेष्य



प्र-5 दिए गए वाक्यों को अर्थपूर्ण बनाकर लिखिए—

(1)

1. ने एक की गबूचंद दिन बुलाया हबूचंद।
2. आलोकित सच्चै भगवान का पथ लोगों करते है।

प्र-6 सोचो और लिखो—

(4)

1. अगर आप वन-विभाग के अधिकारी होते हैं तो वनों के लिए क्या करते ?
2. आप दूसरों की भलाई के लिए क्या-क्या कार्य करते। लिखिए।

प्र-7 किसने, किसको कहा?


(2)

1. बाबा देखों कितनी प्यारी चिड़िया है।
2. 'गबूचंद', यह कैसी व्यवस्था हैं, तुम्हारी?
3. यात्री! मैं तुम्हारी भक्तिभाव से प्रसन्न हूँ।
4. जंगल हैं तो चिड़िया होगी ही।

प्र-8 नीचे दी गई वर्ग पहेली में से पशु-पक्षियों के नाम ढूँढें । सीधे, आड़े, तिरछे सभी प्रकार से (3)

फ	श	हं	ची	ख	र
सा	र	स	ल	र	ब
मो	प	बै	क	गो	क
य	र	च	म	श	ख

प्र-9 चित्र को देखकर पर्यायवाची शब्द लिखिए- (2)



प्र-10 विराम चिन्ह लगाइए- (2)

1. वाह कितना सुंदर घर है
2. उसका क्या नाम है
3. यह एक पुस्तक है
4. दशरथ के चार पुत्रों के नाम राम लक्ष्मण भरत शत्रुघ्न है

प्र-11 एक शब्द में उत्तर दिजिए- (2)

1. रक्षा-बन्धन कौन से माह में मनाया जाता है (हिन्दू कैलेण्डर के अनुसार)
2. दिवाली कौन से माह में आती है।
3. 43 को शब्दों में लिखो।
4. तैंतीस को संख्या में लिखो।

प्र-12 लिंग बदलो- (2)

1. शिवाजी वीर थे तो लक्ष्मीबाई थी
2. मोहन एक कवि थे और शोभा एक \_\_\_\_\_ है।
3. राधा एक विदुषी हैं और राहुल एक \_\_\_\_\_ है।
4. अभिनेता ने फिल्म में अच्छा काम किया तो \_\_\_\_\_ ने भी फिल्म में अच्छा किरदार निभाया।